


EduSahara™ Learning Center Assignment

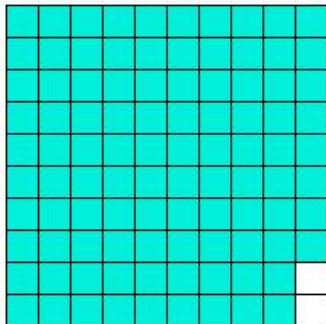
Grade : Class VII, SSC
Chapter : Fractions, Decimals and Rational Numbers
Name : Decimal Diagram Problems
Licensed To : Teachers and Students for non-commercial use

1. What is the decimal number represented by the shaded region?



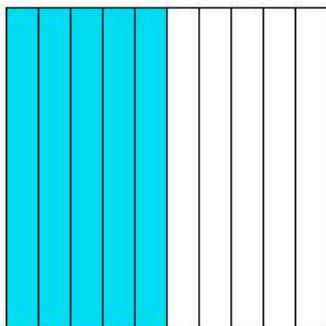
- (i) 0.3 (ii) 0.1 (iii) 0 (iv) 0.2 (v) -0.1
-

2. What is the decimal number represented by the shaded region?



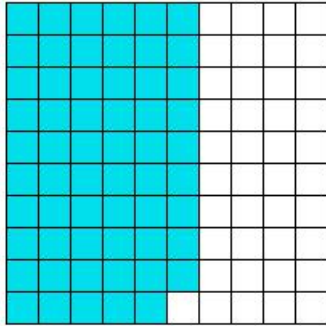
- (i) 1.08 (ii) 0.98 (iii) 0.78 (iv) 0.88 (v) 1.18
-

3. What is the decimal number represented by the shaded region?




- (i) 0.7 (ii) 0.4 (iii) 0.5 (iv) 0.3 (v) 0.6
-

4. What is the decimal number represented by the shaded region?



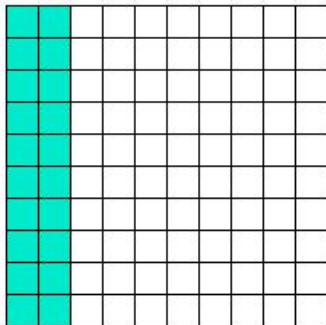
- (i) 0.79 (ii) 0.59 (iii) 0.49 (iv) 0.69 (v) 0.39
-

5. What is the decimal number represented by the shaded region?



- (i) 0 (ii) 0.4 (iii) 0.1 (iv) 0.2 (v) 0.3
-

6. What is the decimal number represented by the shaded region?



- (i) 0.3 (ii) 0.2 (iii) 0 (iv) 0.1 (v) 0.4
-

Assignment Key

- 1) (ii)
- 2) (ii)
- 3) (iii)
- 4) (ii)
- 5) (iv)
- 6) (ii)