



EduSahara™ Learning Center Assignment**Grade : Class VII, CBSE****Chapter : Perimeter and Area****Name : Square Paths****Licensed To : Teachers and Students for non-commercial use**

1. If the outer and inner sides of a square path are 10.00 cm and 7.00 cm respectively, the width of the square path =



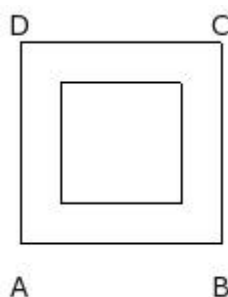
- (i) 1.50 cm (ii) 2.50 cm (iii) 3.50 cm (iv) 9.50 cm (v) 0.50 cm

2. If the outer and inner sides of a square path are 10.00 cm and 7.00 cm respectively, the area of the square path =



- (i) 51.00 sq.cm (ii) 56.00 sq.cm (iii) 46.00 sq.cm (iv) 54.00 sq.cm (v) 48.00 sq.cm

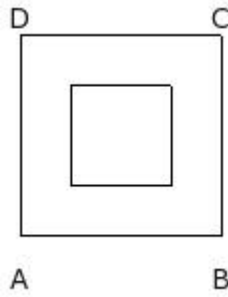
3. If the width of a square path is 2.00 cm and inner side is 6.00 cm, the outer side of the square path =



- (i) 7.00 cm (ii) 10.00 cm (iii) 15.00 cm (iv) 13.00 cm (v) 5.00 cm


4. If the width of a square path is 2.50 cm and inner side is 5.00 cm, the area of the square path

=




- (i) 75.00 sq.cm (ii) 80.00 sq.cm (iii) 70.00 sq.cm (iv) 78.00 sq.cm (v) 72.00 sq.cm

5. If the width of a square path is 1.50 cm and outer side is 10.00 cm, the area of the square path =




- (i) 56.00 sq.cm (ii) 51.00 sq.cm (iii) 54.00 sq.cm (iv) 46.00 sq.cm (v) 48.00 sq.cm

6. If the inner side of a square path is 9.00 cm and area of the square path is 19.00 sq.cm, the outer side of the square path =




- (i) 7.00 cm (ii) 13.00 cm (iii) 15.00 cm (iv) 5.00 cm (v) 10.00 cm

7. If the inner side of a square path is 9.00 cm and area of the square path is 19.00 sq.cm, the area of the outer square =




- (i) 122.00 sq.cm (ii) 94.00 sq.cm (iii) 77.00 sq.cm (iv) 103.00 sq.cm (v) 100.00 sq.cm

8. If the inner side of a square path is 7.00 cm and area of the square path is 51.00 sq.cm, the width of the square path =




- (i) 3.50 cm (ii) 9.50 cm (iii) 1.50 cm (iv) 2.50 cm (v) 0.50 cm

9. If the outer side of a square path is 8.00 cm and area of the square path is 28.00 sq.cm, the inner side of the square path =




- (i) 7.00 cm (ii) 4.00 cm (iii) 8.00 cm (iv) 6.00 cm (v) 5.00 cm

10. If the outer side of a square path is 10.00 cm and area of the square path is 19.00 sq.cm, the area of the inner square =




- (i) 76.00 sq.cm (ii) 78.00 sq.cm (iii) 86.00 sq.cm (iv) 84.00 sq.cm (v) 81.00 sq.cm

-
11. If the outer side of a square path is 9.00 cm and area of the square path is 56.00 sq.cm, the area of the outer square =




- (i) 86.00 sq.cm (ii) 84.00 sq.cm (iii) 76.00 sq.cm (iv) 78.00 sq.cm (v) 81.00 sq.cm

-
12. If the outer side of a square path is 8.00 cm and area of the square path is 15.00 sq.cm, the width of the square path =



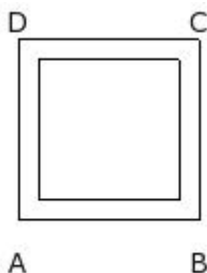
- (i) 0.50 cm (ii) 7.50 cm (iii) 8.50 cm (iv) 1.50 cm (v) 2.50 cm

-
13. If the areas of inner and outer squares of a square path are 25.00 sq.cm and 81.00 sq.cm respectively, the width of the square path =



- (i) 3.00 cm (ii) 0.00 cm (iii) 1.00 cm (iv) 4.00 cm (v) 2.00 cm

-
14. If the areas of inner and outer squares of a square path are 49.00 sq.cm and 81.00 sq.cm respectively, the area of the square path =



(i) 27.00 sq.cm (ii) 29.00 sq.cm (iii) 37.00 sq.cm (iv) 32.00 sq.cm (v) 35.00 sq.cm

Assignment Key

- 1) (i)
- 2) (i)
- 3) (ii)
- 4) (i)
- 5) (ii)
- 6) (v)
- 7) (v)
- 8) (iii)
- 9) (iv)
- 10) (v)
- 11) (v)
- 12) (i)
- 13) (v)
- 14) (iv)